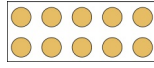


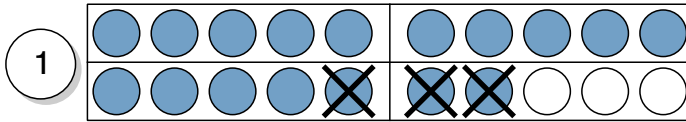
1

Rechne minus (-) im Zwanzigerfeld!

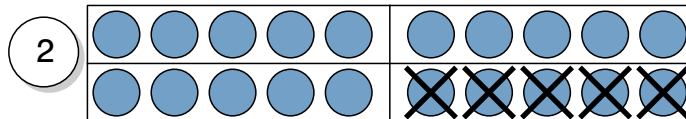
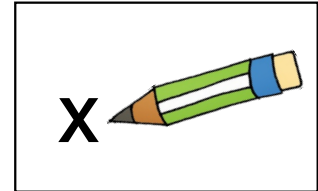


Zahlenraum 20

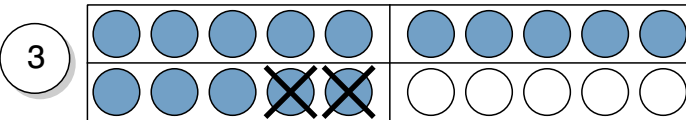
Minus rechnen



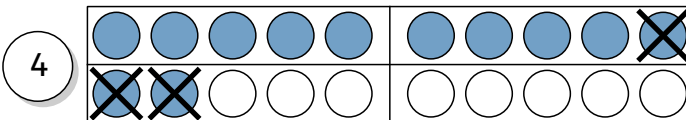
$$\underline{17} - \underline{3} = \underline{14}$$



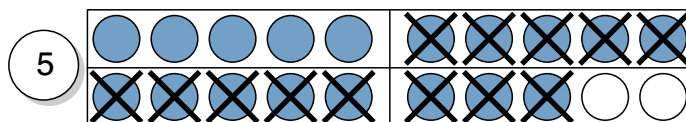
$$\underline{\quad\quad} - \underline{\quad\quad} = \underline{\quad\quad}$$



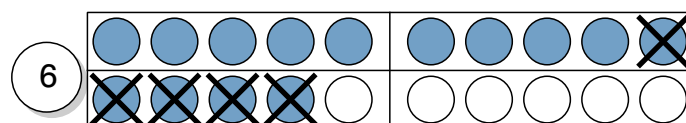
$$\underline{\quad\quad} - \underline{\quad\quad} = \underline{\quad\quad}$$



$$\underline{\quad\quad} - \underline{\quad\quad} = \underline{\quad\quad}$$



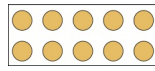
$$\underline{\quad\quad} - \underline{\quad\quad} = \underline{\quad\quad}$$



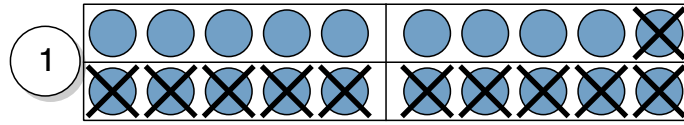
$$\underline{\quad\quad} - \underline{\quad\quad} = \underline{\quad\quad}$$

2

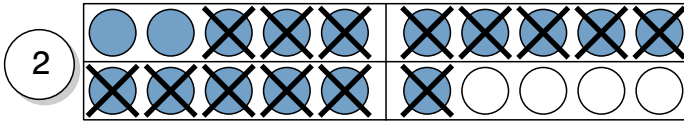
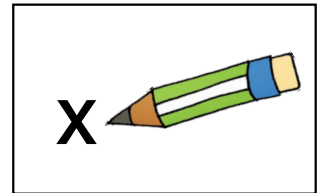
Rechne minus (-) im Zwanzigerfeld!



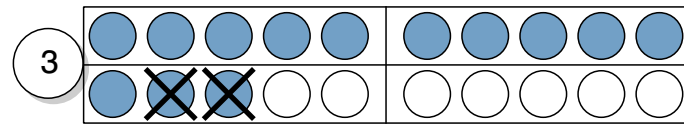
Zahlenraum 20
Minus rechnen



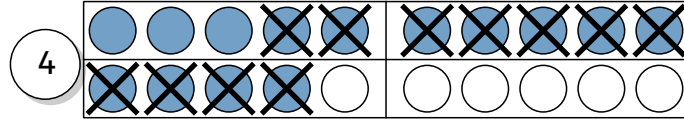
----- - ----- = -----



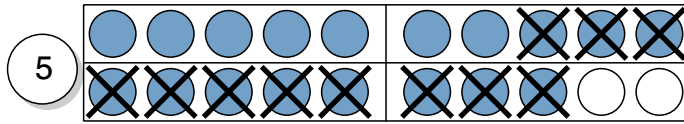
----- - ----- = -----



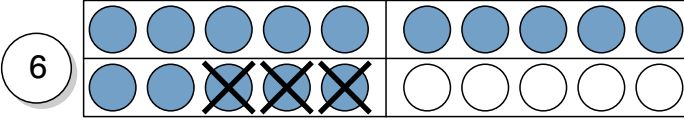
----- - ----- = -----



----- - ----- = -----



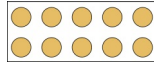
----- - ----- = -----



----- - ----- = -----

3

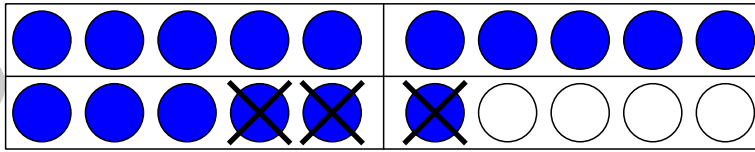
Rechne minus (-) im Zwanzigerfeld!



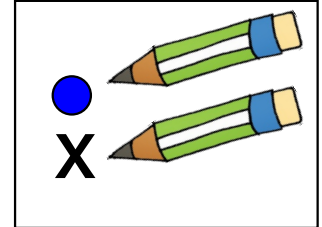
Zahlenraum 20

Minus rechnen

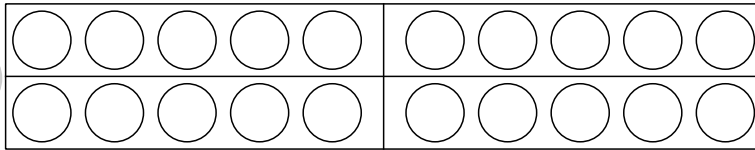
1



$$16 - 3 = 13$$

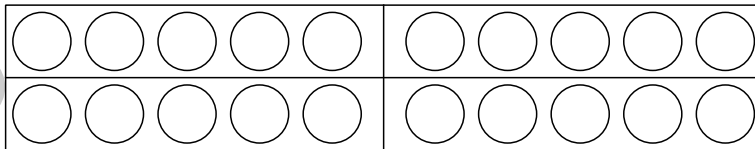


2



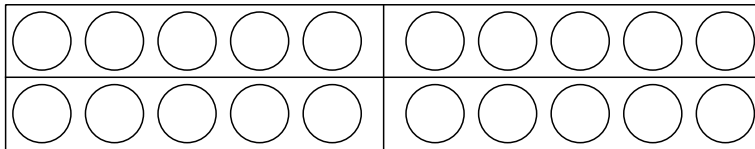
$$20 - 9 = \text{----}$$

3



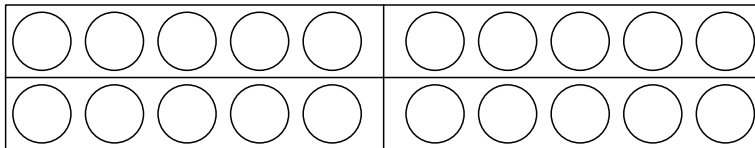
$$17 - 10 = \text{----}$$

4



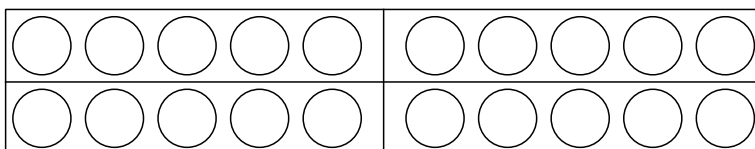
$$11 - 5 = \text{----}$$

5



$$16 - 8 = \text{----}$$

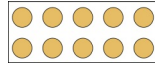
6



$$12 - 10 = \text{----}$$

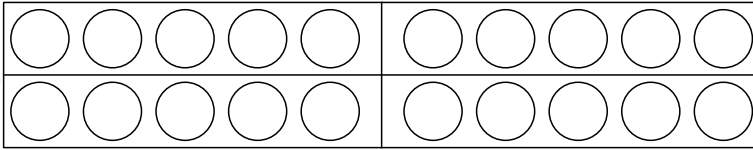
4

Rechne minus (-) im Zwanzigerfeld!

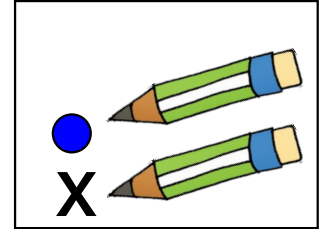


Zahlenraum 20 Minus rechnen

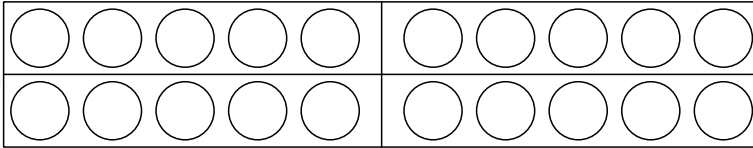
1



$$16 - 10 = \text{----}$$

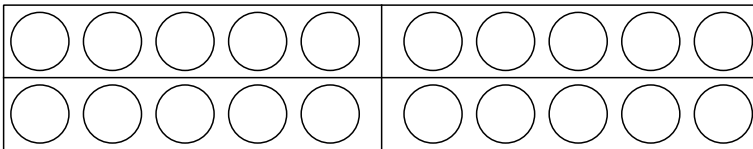


2



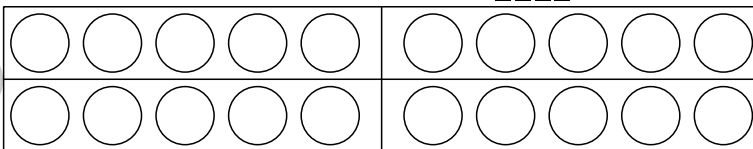
$$11 - 6 = \text{----}$$

3



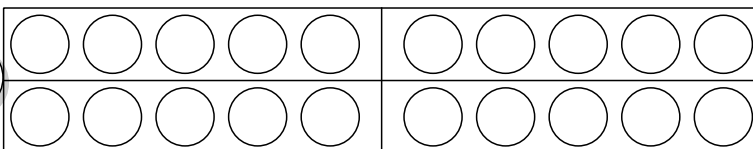
$$13 - 8 = \text{----}$$

4



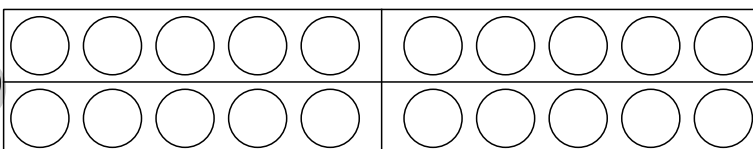
$$11 - 9 = \text{----}$$

5



$$20 - 3 = \text{-----}$$


6



$$19 - 5 = \text{-----}$$

5

Rechne minus (-) im Pfeilbild!




Zahlenraum 20
Minus rechnen

1 19 -7 -5

2 20 -5 -11

3 15 -1 -4

4 16 -4 -2

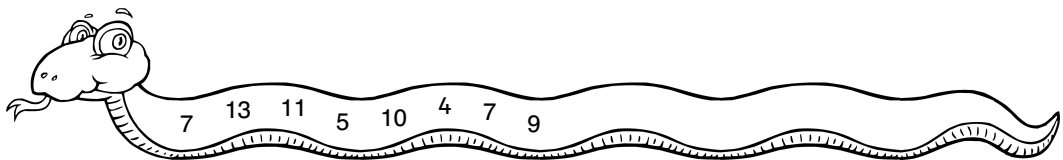


5 14 -5 -2

6 20 -9 -7


7 18 -8 -3

8 15 -2 -8



6

Rechne minus (-) im Pfeilbild!



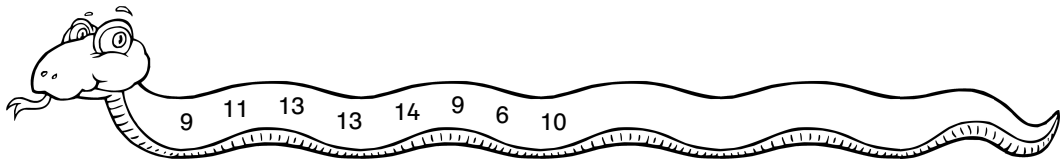
Zahlenraum 20
Minus rechnen

1 16 -3 -7

2 14 -3 -2

3 17 -3 -1

4 15 -5 -1

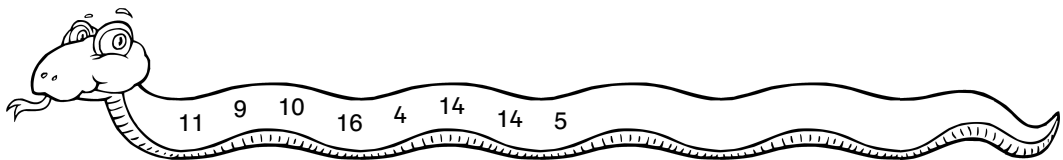


5 18 -4 -5

6 16 -5 -7

7 19 -5 -4

8 17 -1 -11



7

Rechne minus (-) im Päckchen!



Zahlenraum 20 Minus rechnen

$$1 \quad 20 - 10 = \underline{\quad}$$

$$2 \quad 13 - 1 = \underline{\quad}$$

$$14 - 2 = \underline{\quad}$$

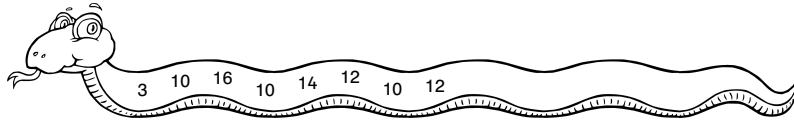
$$20 - 10 = \underline{\quad}$$

$$18 - 2 = \underline{\quad}$$

$$14 - 11 = \underline{\quad}$$

$$15 - 1 = \underline{\quad}$$

$$11 - 1 = \underline{\quad}$$



$$3 \quad 17 - 4 = \underline{\quad}$$

$$4 \quad 11 - 10 = \underline{\quad}$$

$$12 - 2 = \underline{\quad}$$

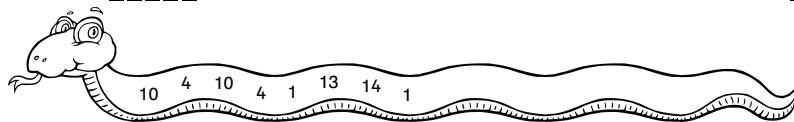
$$19 - 15 = \underline{\quad}$$

$$15 - 5 = \underline{\quad}$$

$$15 - 1 = \underline{\quad}$$

$$18 - 14 = \underline{\quad}$$

$$12 - 11 = \underline{\quad}$$



$$5 \quad 15 - 12 = \underline{\quad}$$

$$6 \quad 14 - 13 = \underline{\quad}$$

$$16 - 15 = \underline{\quad}$$

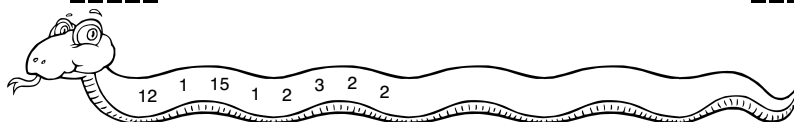
$$13 - 11 = \underline{\quad}$$

$$17 - 2 = \underline{\quad}$$

$$16 - 14 = \underline{\quad}$$

$$13 - 11 = \underline{\quad}$$

$$16 - 4 = \underline{\quad}$$



8

Rechne minus (-) im Päckchen!



Zahlenraum 20 Minus rechnen

$$\textcircled{1} \quad 15 - 10 = \underline{\quad}$$

$$\textcircled{2} \quad 11 - 1 = \underline{\quad}$$

$$12 - 11 = \underline{\quad}$$

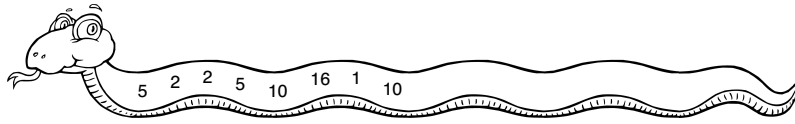
$$12 - 10 = \underline{\quad}$$

$$18 - 16 = \underline{\quad}$$

$$16 - 11 = \underline{\quad}$$

$$20 - 10 = \underline{\quad}$$

$$18 - 2 = \underline{\quad}$$



$$\textcircled{3} \quad 12 - \underline{\quad} = 10$$

$$\textcircled{4} \quad 16 - \underline{\quad} = 13$$

$$17 - \underline{\quad} = 1$$

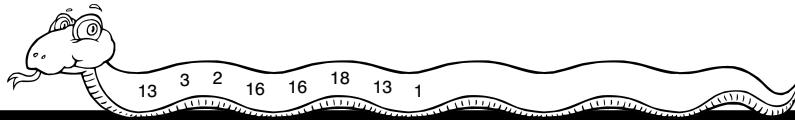
$$19 - \underline{\quad} = 1$$

$$19 - \underline{\quad} = 3$$

$$13 - \underline{\quad} = 12$$

$$15 - \underline{\quad} = 2$$

$$19 - \underline{\quad} = 6$$



$$\textcircled{5} \quad \underline{\quad} - 4 = 10$$

$$\textcircled{6} \quad \underline{\quad} - 2 = 16$$

$$\underline{\quad} - 10 = 9$$

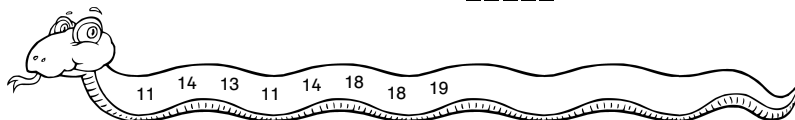
$$\underline{\quad} - 10 = 4$$

$$\underline{\quad} - 10 = 3$$

$$\underline{\quad} - 7 = 11$$

$$\underline{\quad} - 10 = 1$$

$$\underline{\quad} - 10 = 1$$



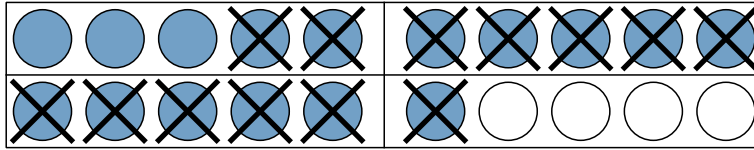
9

Rechne minus (-)
als Rechenprofi!



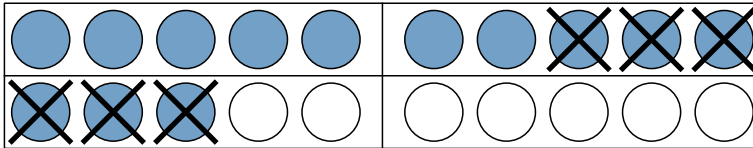
Zahlenraum 20
Minus rechnen

1



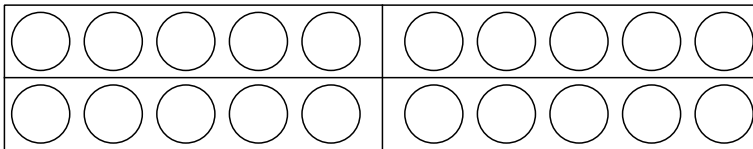
$$\text{-----} - \text{-----} = \text{-----}$$

2

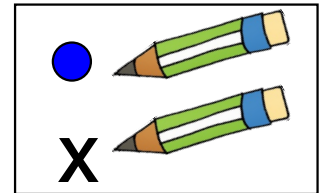


$$\text{-----} - \text{-----} = \text{-----}$$

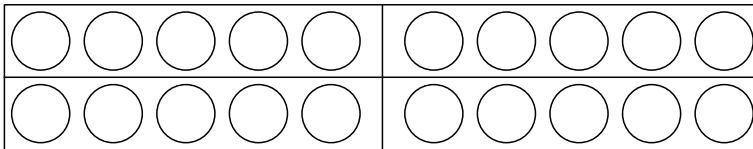
3



$$18 - 12 = \text{-----}$$



4



$$15 - 13 = \text{-----}$$

5

$$18 - 2 = \text{-----}$$

6

$$13 - 1 = \text{-----}$$

$$17 - 13 = \text{-----}$$

$$16 - 4 = \text{-----}$$

$$11 - 10 = \text{-----}$$

$$14 - 4 = \text{-----}$$

$$17 - 11 = \text{-----}$$

$$14 - 3 = \text{-----}$$




11 16 12 10 6 1 4 12




1 $\xrightarrow{-4}$ $\xrightarrow{-5}$

2 $\xrightarrow{-1}$ $\xrightarrow{-10}$



3 $\xrightarrow{\quad}$ $\xrightarrow{-10}$

4 $\xrightarrow{-3}$ $\xrightarrow{-14}$



5 $16 - \underline{\quad} = 3$

6 $\underline{\quad} - 13 = 3$

$16 - \underline{\quad} = 10$

$\underline{\quad} - 6 = 10$

$13 - \underline{\quad} = 10$

$\underline{\quad} - 3 = 10$

$20 - \underline{\quad} = 10$

$\underline{\quad} - 10 = 10$

